






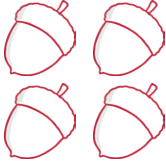

















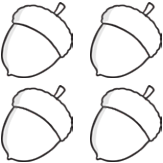









# Greater Than or Less Than

Count the autumn-themed objects in each box. Then, draw the correct symbol in the middle box to show which is greater. The first one has been done for you.



 <div data-bbox="483 622 547 674">3</div>		<div data-bbox="1050 622 1114 674">5</div> 
 <div data-bbox="483 801 547 864"></div>		<div data-bbox="1050 808 1114 871"></div> 
 <div data-bbox="483 999 547 1061"></div>		<div data-bbox="1050 999 1114 1061"></div> 
 <div data-bbox="483 1189 547 1252"></div>		<div data-bbox="1050 1189 1114 1252"></div> 
 <div data-bbox="483 1373 547 1435"></div>		<div data-bbox="1050 1373 1114 1435"></div> 
 <div data-bbox="483 1563 547 1626"></div>		<div data-bbox="1050 1563 1114 1626"></div> 
 <div data-bbox="483 1753 547 1816"></div>		<div data-bbox="1050 1753 1114 1816"></div> 
 <div data-bbox="483 1944 547 2007"></div>		<div data-bbox="1050 1944 1114 2007"></div> 

# Greater Than or Less Than **Answers**

 <div>3</div>	$<$	<div>5</div> 
 <div>3</div>	$>$	<div>1</div> 
 <div>1</div>	$<$	<div>4</div> 
 <div>5</div>	$>$	<div>4</div> 
 <div>4</div>	$>$	<div>2</div> 
 <div>2</div>	$<$	<div>5</div> 
 <div>1</div>	$<$	<div>3</div> 
 <div>5</div>	$>$	<div>2</div> 